
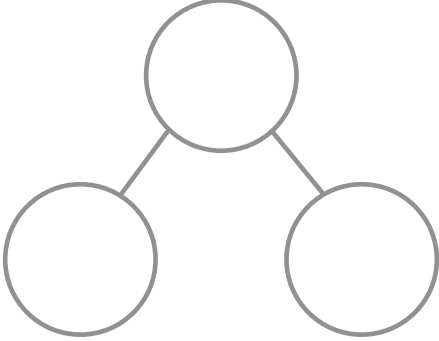



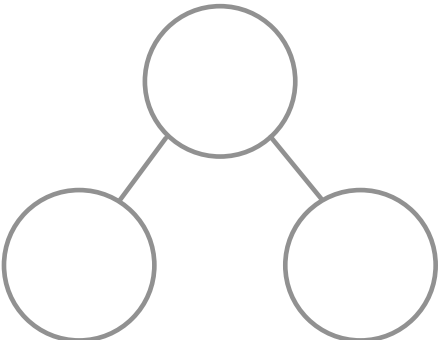
Name :

Date :

Place Value

Find the number and complete the following

 $=$					
<table border="1" style="width: 100%; height: 100%;"> <thead> <tr> <th style="width: 50%;">Tens</th> <th style="width: 50%;">Ones</th> </tr> </thead> <tbody> <tr> <td style="height: 50px;"></td> <td></td> </tr> </tbody> </table>	Tens	Ones			<p>Expand the number:</p> <p>_____ + _____ = _____</p>
Tens	Ones				

 $=$					
<table border="1" style="width: 100%; height: 100%;"> <thead> <tr> <th style="width: 50%;">Tens</th> <th style="width: 50%;">Ones</th> </tr> </thead> <tbody> <tr> <td style="height: 50px;"></td> <td></td> </tr> </tbody> </table>	Tens	Ones			<p>Expand the number:</p> <p>_____ + _____ = _____</p>
Tens	Ones				