


Name :


Date :

## 2D shapes properties


Read the properties of the given shapes and write their names.



This 2D shape has 4 straight edges of same length. It has 4 sides too.  
It is a \_\_\_\_\_



This 2D shape has no straight edges or sides but it is round and round.  
It is a \_\_\_\_\_



This 2D shape has 3 edges and 3 sides.  
It is a \_\_\_\_\_



This 2D shape has 4 straight edges . 2 of them are long and the other 2 are short. It also has 4 sides.  
It is a \_\_\_\_\_