


Name :

Date :


Carrots Subtraction

Write the sum.




Three carrots are shown on the left, followed by a minus sign, and one carrot is shown on the right. To the right of the equation is an equals sign followed by a large empty rounded rectangle for the answer.

$$3 - 1 = \square$$




Three carrots are shown on the left, followed by a minus sign, and two carrots are shown on the right. To the right of the equation is an equals sign followed by a large empty rounded rectangle for the answer.

$$3 - 2 = \square$$



Two carrots are shown on the left, followed by a minus sign, and one carrot is shown on the right. To the right of the equation is an equals sign followed by a large empty rounded rectangle for the answer.

$$2 - 1 = \square$$



Four carrots are shown on the left, followed by a minus sign, and two carrots are shown on the right. To the right of the equation is an equals sign followed by a large empty rounded rectangle for the answer.

$$4 - 2 = \square$$